

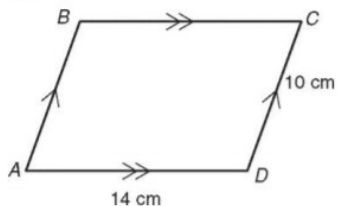
Problem of the Day

Full Name: _____ Block: _____

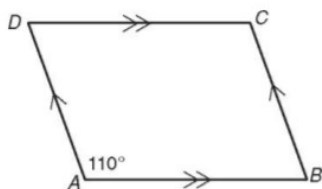
Geometry: April 27th
Topic: Properties of Parallelograms

Find each measure.

1. AB



2. $m\angle D$



Find each measure in $\square LMNP$.

3. ML

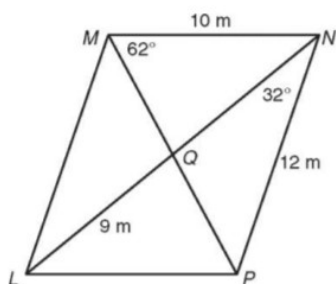
4. LP

5. $m\angle LPM$

6. LN

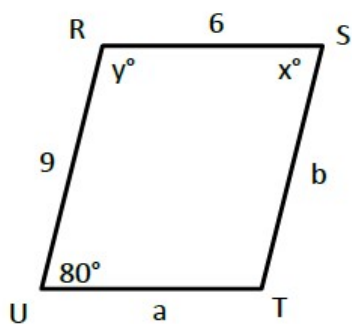
7. $m\angle MLN$

8. QN



RSTU is a parallelogram. Find the values of x , y , a , and b .

9.



10.

